

Maths

WATCH THIS VIDEO:

VERBALLY

What time is it?

a)



b)



VERBALLY

Telling time to the hour

Let's Learn

Math Lab

11 o'clock



12 o'clock



1 o'clock



10 o'clock



2 o'clock



9 o'clock



3 o'clock



The shorter hand — is the **hour hand**.

The longer hand — is the **minute hand**.

When the minute hand is at 12, we say **o'clock**.

8 o'clock



4 o'clock



6 o'clock



5 o'clock

7 o'clock




c)




d)




DRAW A LINE FROM THE CLOCK TO THE TIME



8 o'clock



5 o'clock




1 o'clock




3 o'clock




11 o'clock



10 o'clock



7 o'clock



9 o'clock

Click here:

