

# LEVEL 3 - TEST

## Theme 1: Numbers

Full name: ..... School: ..... Class: .....	<b>Mark</b>
---	-------------

### Part 1

- 2 questions -

Look and read. Put a tick (✓) or a cross (✗) in the box.  
There are two examples.

#### Examples

$$\begin{array}{cccc} 2 & 0 & + & 9 \\ = & ? & & \end{array}$$

Twenty plus nine is  
twenty-nine.



This is a square.



#### Questions

①

$$\begin{array}{cccc} 6 & 0 & + & 5 \\ = & ? & & \end{array}$$

Sixty plus five is twenty-one.




This is an oval.



## Part 2

- 2 questions -

Look and read. Write Yes or No.



### Examples

I can see two stars.

Yes

I can see three circles.

No

### Questions

① I can see four ovals. \_\_\_\_\_

② I can see three rectangles. \_\_\_\_\_

## Part 3

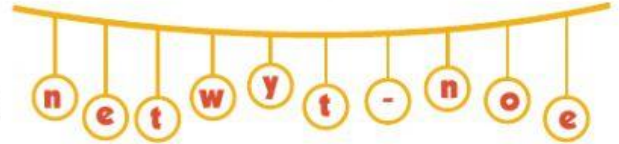
- 2 questions -

Look at the pictures. Look at the letters. Write the words.

Example

21

twenty-one

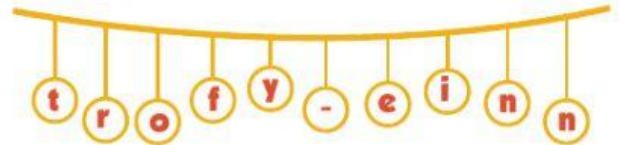


Questions

①

49

-----



②

58

-----



## Part 4

- 2 questions -

Read this. Choose a word from the box. Write the correct word next to numbers 1-2. There is one example.



Shapes are everywhere! Look, the window is a square, and the (1) \_\_\_\_\_ is a rectangle. The (2) \_\_\_\_\_ is a circle and the football is an oval.

### Example



square



photo



basketball



football

## Part 5

- 2 questions -

Look at the pictures and read the questions.  
Write one-word answers.

Examples

How many balloons are there?

There are four balloons.

What shape is the window?

It's a square.

Questions

1. How old is Max?

He's \_\_\_\_\_ years old.

2. What shape is the cake?

It's a \_\_\_\_\_.