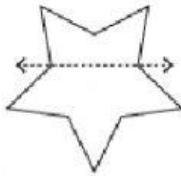


Concept HW_Grade-7_Symmetry

Linear Symmetry

Determine if the dotted line on each shape is a line of symmetry or not.

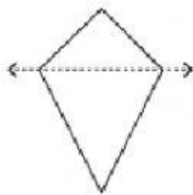
1.



Line of Symmetry

Not a Line of Symmetry

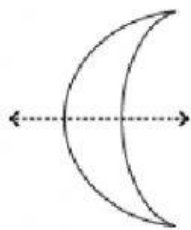
2.



Line of Symmetry

Not a Line of Symmetry

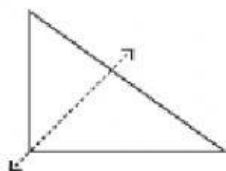
3.



Line of Symmetry

Not a Line of Symmetry

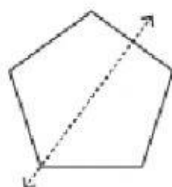
4.



Line of Symmetry

Not a Line of Symmetry

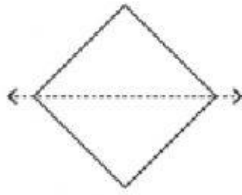
5.



Line of Symmetry

Not a Line of Symmetry

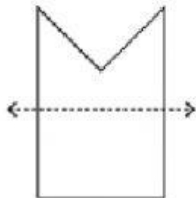
6.



Line of Symmetry

Not a Line of Symmetry

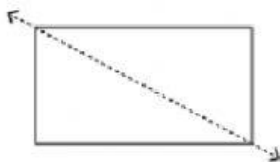
7.



Line of Symmetry

Not a Line of Symmetry

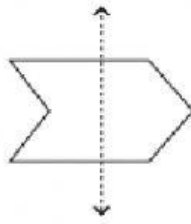
8.



Line of Symmetry

Not a Line of Symmetry

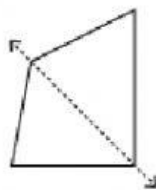
9.



Line of Symmetry

Not a Line of Symmetry

10.



Line of Symmetry

Not a Line of Symmetry