












Codeyoung

Understand sandglass and analog clock, and
a.m. and p.m.

HW _ An Introduction to A.M. and P.M.







Does this happen in the a.m. or p.m.? Please
select.

<p>Having dinner</p> 	<p>Morning Jog</p> 	<p>Bedtime stories</p> 
<p>A. M. / P. M.</p>	<p>A. M. / P. M.</p>	<p>A. M. / P. M.</p>
<p>Birthday party on a Saturday morning</p> 	<p>Going home by school bus after school</p> 	<p>Visiting the doctor before lunch</p> 
<p>A. M. / P. M.</p>	<p>A. M. / P. M.</p>	<p>A. M. / P. M.</p>

<p>Taking school bus to school</p> 	<p>Riding bike after lunch</p> 	<p>Sunrise</p> 
A. M. / P. M.	A. M. / P. M.	A. M. / P. M.

2.

Write the time with "a.m." or "p.m." for each activity.

 <p>Dinner is served at</p> <p>_____.</p>	 <p>School is over at</p> <p>_____.</p>	 <p>Bedtime is at</p> <p>_____.</p>
 <p>Recess is at</p> <p>_____.</p>	 <p>You should try to finish homework by</p> <p>_____.</p>	 <p>Breakfast will be ready by</p> <p>_____.</p>