

All About Number 3

Number Formation Activity



3

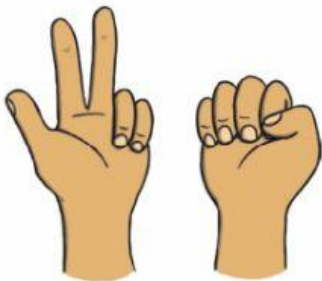


3




3


How many fingers are being shown?



How many counters are in the ten-frame?



How many boats can you see?



How many dogs are there?

