

Content HW_Grade-5_Geometry

Lines & Vertically Opposite Angles

1. 1) Which of the following is the vertically opposite angle of $\angle AOE$?

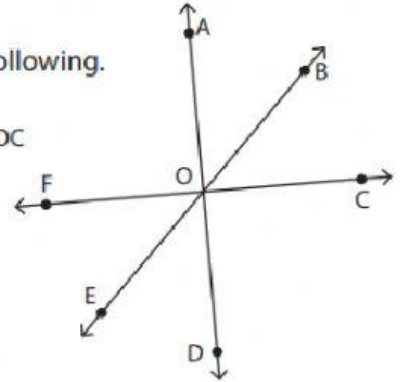
i) $\angle AOB$ ii) $\angle DOE$ iii) $\angle BOD$ iv) $\angle COB$

- 2) Identify the vertically opposite angle of $\angle EOF$ from the following.


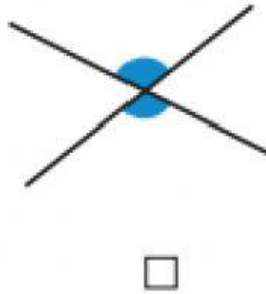
i) $\angle BOC$ ii) $\angle AOF$ iii) $\angle COD$ iv) $\angle EOC$

- 3) Write the the vertically opposite angle of $\angle COD$.

- 4) Write the the vertically opposite angle of $\angle FOB$.



2. Tick the pairs of angles that are vertically opposite.


☐

☐

☐

☐

☐