

ROLL NO:

NAME:

SECTION:

WORKSHEET# 6

LINES AND 2D-SHAPES

Q1. Count and write

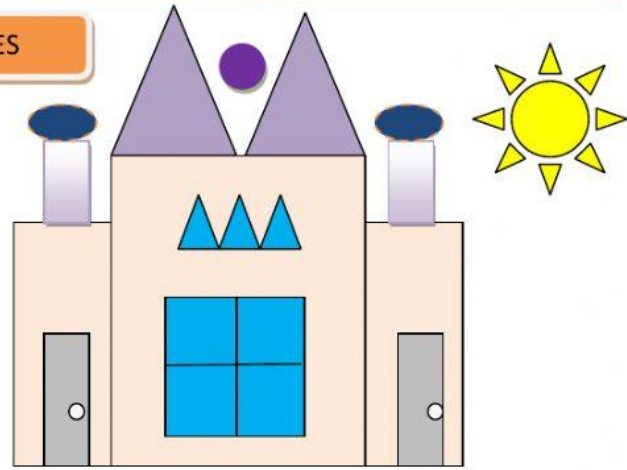
Square: _____

Rectangle: _____

Triangle: _____

Oval: _____

Circle: _____





Q2. Select the letters/numbers having both straight and curved lines.



Q3. Complete the table.

SHAPES	NAMES	CORNERS	SIDES

Q4. Look at the pattern and drag the shape that comes next.



Q5. Count and write the number of straight and curved lines.

Straight lines: _____

Curved Lines: _____

