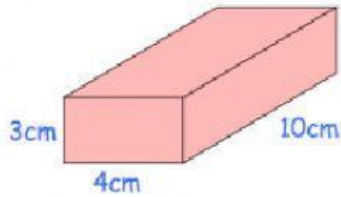


Concept CW_Grade-6_Mensuration

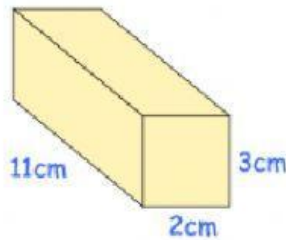
An Introduction to the Volume of Cubes and Cuboids

Question 1: Work out the volume of each cuboid.
Include suitable units.

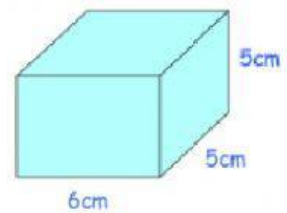
(a)



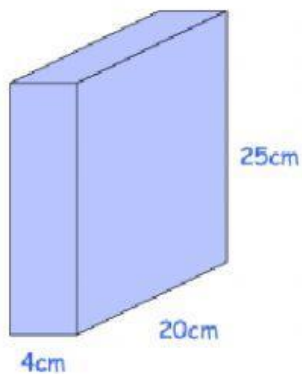
(b)



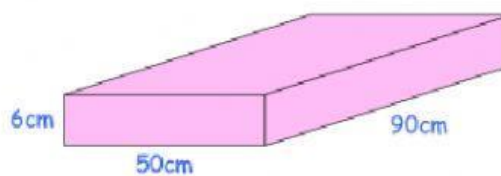
(c)



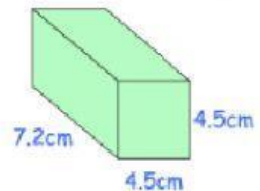
(d)



(e)



(f)



ANSWERS

a)

b)

c)

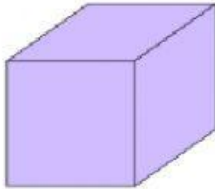
d)

e)

f)

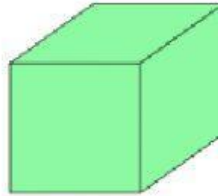
Question 2: Work out the volume of each cube.
Include suitable units.

(a)



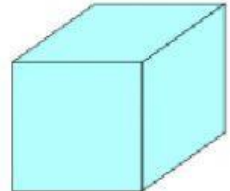
3cm

(b)



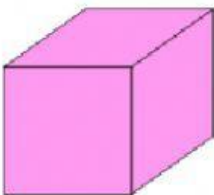
5m

(c)



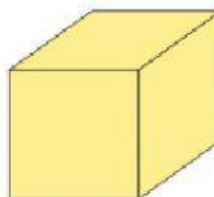
7mm

(d)



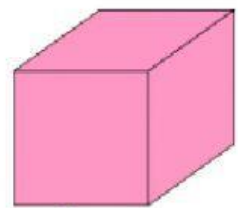
21cm

(e)



0.6cm

(f)



$4\frac{1}{2}$ m

ANSWERS

a)

b)

c)

d)

e)

f)