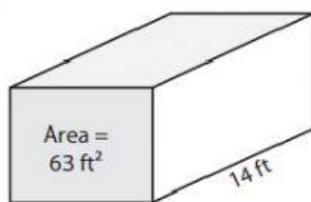


Advanced_Grade-6_Mensuration

An Introduction to the Volume of Cubes and Cuboids

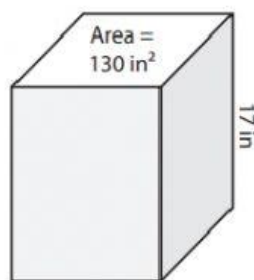
Find the volume of each rectangular prism.

1)



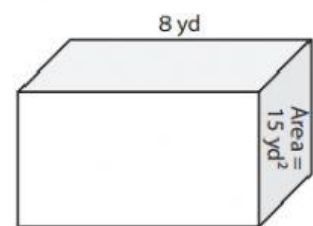
Volume = _____

2)



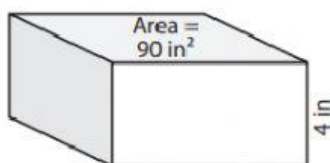
Volume = _____

3)



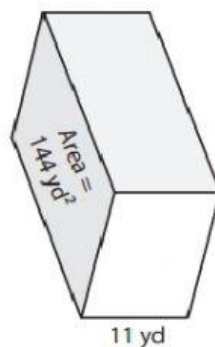
Volume = _____

4)



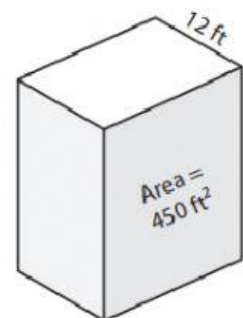
Volume = _____

5)



Volume = _____

6)



Volume = _____

- 7) A rectangular prism has a height of 22 yards and a base with area of 152 square yards. What is its volume?

- 8) Find the volume of the rectangular prism with a base area of 13 square feet and a height of 7 feet.
