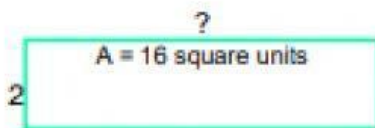


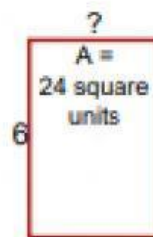
Concept CW_Grade-6_Mensuration

The Area of Squares and Rectangles

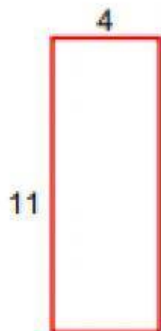
- 1 a. Find the missing side length, when the area is 16 square units.



- 1 b. Find the missing side length, when the area is 24 square units.



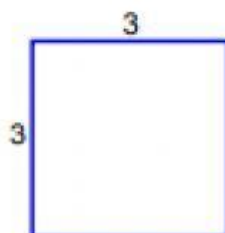
- 2 a. Find the perimeter of the rectangle.




- 2 b. Find the perimeter of the rectangle.



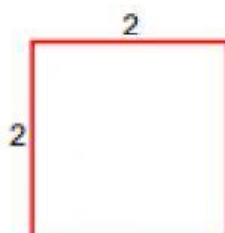
- 3 a. Find the area of the rectangle.



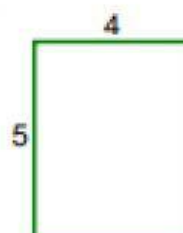
- 3 b. Find the missing side length, when the perimeter is 20.



- 4 a. Find the area of the square.

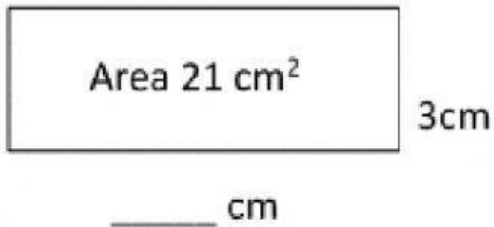


- 4 b. Find the area of the rectangle.

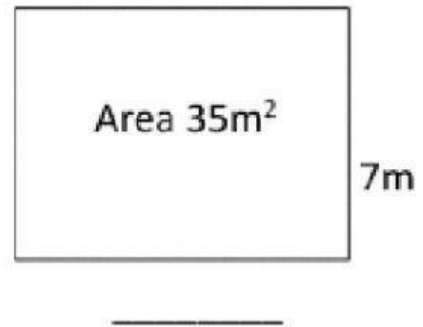


Use the area and the side measurements to find the length of the missing side.

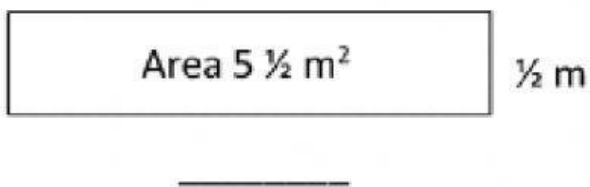
1)



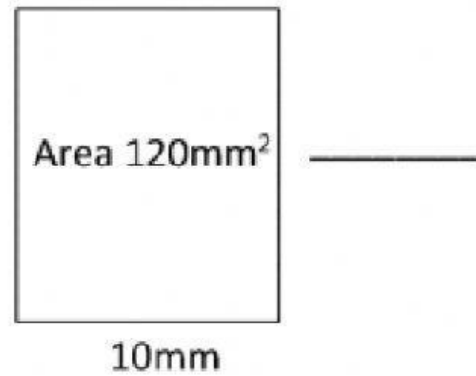
2)



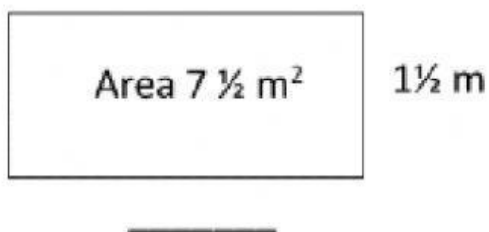
3)



4)



5)



6)

