

Advanced_Grade-6_Mensuration

A Recap to Area

A) Find the area of each rectangle for the given measurements.

1) length = 10 ft, width = 8 ft

Area = _____

2) width = 4 yd, length = 7 yd

Area = _____

3) width = 9 in, length = 12 in


Area = _____

4) length = 16 ft, width = 11 ft

Area = _____

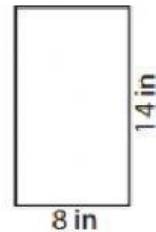
B) Find the area of each rectangle.

5)




Area = _____

6)



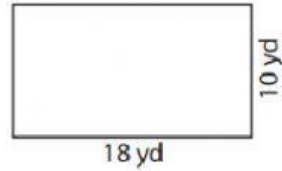
Area = _____

7)



Area = _____

8)



Area = _____

- 9) The length and width of a rectangle are 4 inches and 3 inches respectively. Determine the area of the rectangle.
