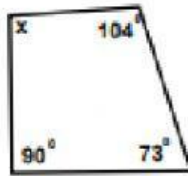


Concept CW_Grade-6_Geometry

The Angle Sum Property of a Quadrilateral

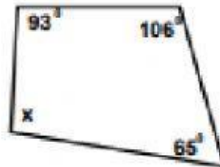
Find the measure of the missing angle.

1)



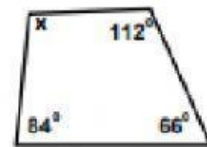
Solve for x _____

2)



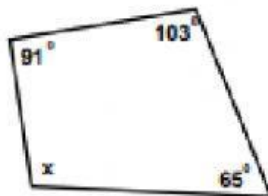
Solve for x _____

3)



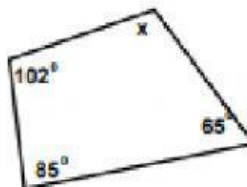
Solve for x _____

4)



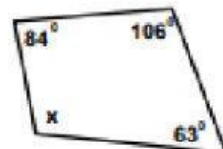
Solve for x _____

5)



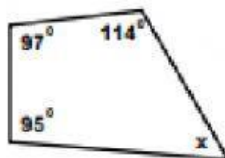
Solve for x _____

6)



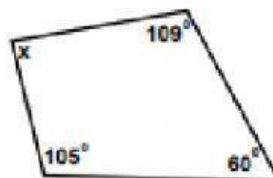
Solve for x _____

7)



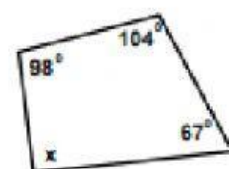
Solve for x _____

8)



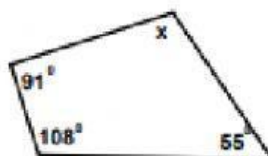
Solve for x _____

9)



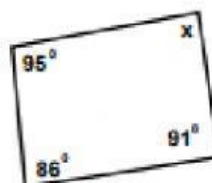
Solve for x _____

10)



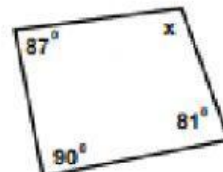
Solve for x _____

11)



Solve for x _____

12)



Solve for x _____

