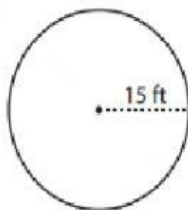


Name: \_\_\_\_\_

Teacher: \_\_\_\_\_

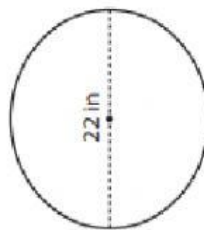
Instructions: Use the value of  $\pi$  as 3.14. Write (Round) your answers to 2 decimal places.

1)



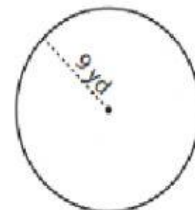
Area =

2)



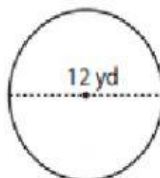
Area =

3)



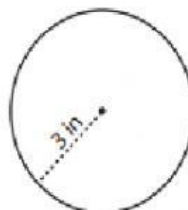
Area =

4)



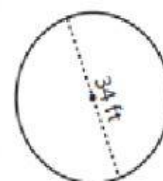
Area =

5)



Area =

6)



Area =