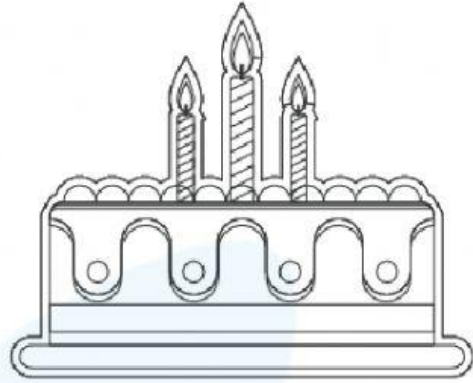
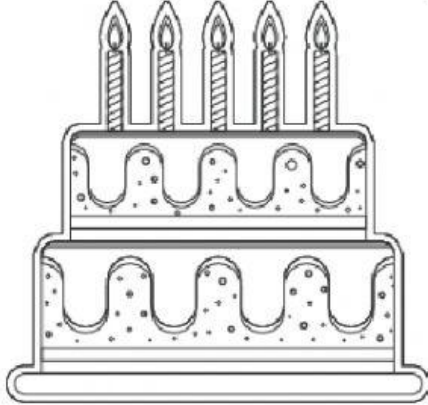



More and Less Worksheets for Kindergarten

Q.1. Color the cake having more candles.



Q.2. Arrange 8, 3, 2 and 5 in descending order.

Q.3. Which of the following has more legs?



Q.4. Which house has less windows?





Q.5. Compare and color the right option.



has

more

less

petals than



Q.6. Color the apple showing a higher number.



Q.7 Circle the dice having less numbers of dots.



Q.8. State True or False:

7 is more than 10.

Q.9. Circle the group having less caps.



Q.10. Which of the following two numbers is more?

- a. 4
- b. 6

