




More and Less Worksheets for Kindergarten

Q.1. Circle the flower which has more petals.



Q.2. Compare and color the right option.



has

more

less

legs than




Q.3. 10 is ____ than 4.

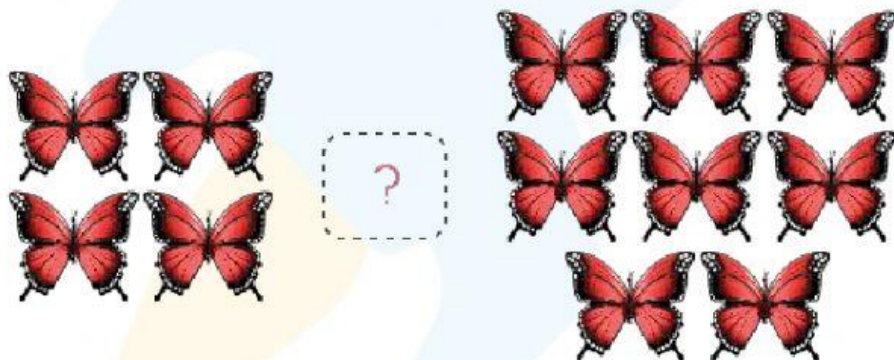
Q.4. Circle the train which has less wheels.




Q.5. Tick (✓) which box has more objects.



Q.6. Count the butterflies and fill the correct symbol ($>$, $<$) in the circle.




Q.7 Color the box having less strawberries.




Q.8. Tick (✓) the correct option from the following.

- a. 8 is less than 5.
- b. 7 is more than 6.
- c. 3 is less than 1.
- d. 2 is more than 4.

Q.9. Color the fruits which are less in number.



Q.10. Which of the following has more objects?

- a. 
- b. 