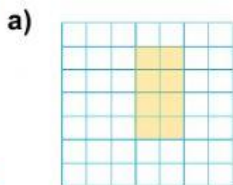


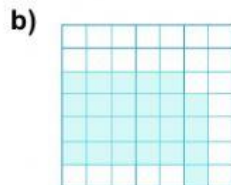
Name: _____ Date: _____

Mathematics
Area of Basic Shapes

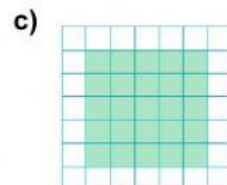
1. Look at each shape carefully, calculate the area.



Area = _____ cm^2

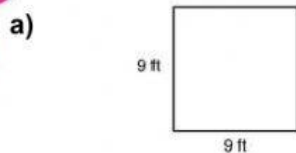


Area = _____ cm^2

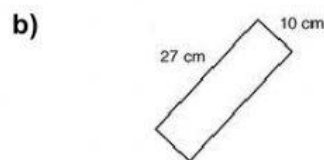


Area = _____ cm^2

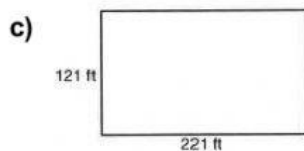
2. Calculate the area of the shapes below.



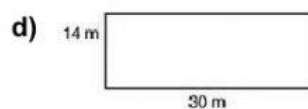
Area = _____ ft^2



Area = _____ cm^2



Area = _____ ft^2



Area = _____ m^2

3. Read the word problem and write your answer on the line provided.

You have a square shaped garden with a length of 48.25 mi and a width of 35.5 mi. What is the area of the garden?

Area = _____ mi^2

Created by: Ms. Antonia Bain