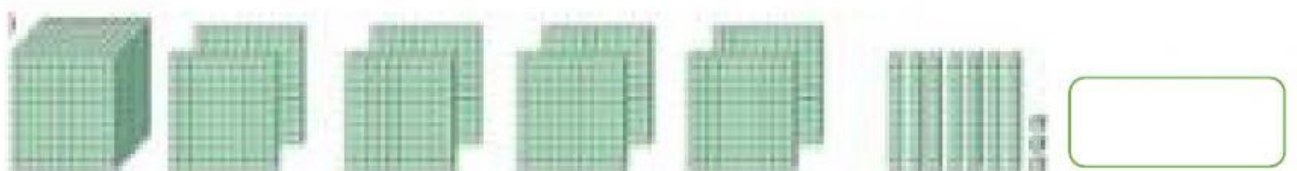






A. Directions: Count the blocks. Write your answer in the box.



**B. Directions: Read and analyze each question carefully. Write your answer in the box.**

1. Complete the number patterns.

3631, 3731, 3831, \_\_\_\_\_, \_\_\_\_\_.

2. Count on by hundreds.

7542, 7642, 7742, \_\_\_\_\_. What is the missing number?

3. Count on by tens.

3946, 3956, \_\_\_\_, 3976. What is the missing number?

4. Complete the number patterns.

\_\_\_\_\_, \_\_\_\_\_, 3999, 4499, 4999.

