









Advance_KinderGarden_Sides and Corners

Write the name of shapes with number of sides and corners

 Sides <input type="text"/> Corners <input type="text"/> Name _____	 Sides <input type="text"/> Corners <input type="text"/> Name _____
 Sides <input type="text"/> Corners <input type="text"/> Name _____	 Sides <input type="text"/> Corners <input type="text"/> Name _____
 Sides <input type="text"/> Corners <input type="text"/> Name _____	 Sides <input type="text"/> Corners <input type="text"/> Name _____
 Sides <input type="text"/> Corners <input type="text"/> Name _____	 Sides <input type="text"/> Corners <input type="text"/> Name _____