

Advanced_Grade-3_Number System

Numbers before, after and between

1.

Number up to 101 - 1000

What number comes before and after ?








___ 127 ___	___ 881 ___	___ 958 ___
___ 457 ___	___ 402 ___	___ 888 ___
___ 401 ___	___ 912 ___	___ 955 ___
___ 122 ___	___ 475 ___	___ 572 ___








2.







Write the numbers that come before and after each number








198 <input type="text"/> <input type="text"/>	<input type="text"/> <input type="text"/> 227	<input type="text"/> <input type="text"/> 469
<input type="text"/> 556 <input type="text"/>	<input type="text"/> 235 <input type="text"/>	<input type="text"/> 349 <input type="text"/>
<input type="text"/> <input type="text"/> 902	<input type="text"/> <input type="text"/> 454	<input type="text"/> <input type="text"/> 702
<input type="text"/> 589 <input type="text"/>	100 <input type="text"/> <input type="text"/>	<input type="text"/> <input type="text"/> 180

3. Complete the following counting:

(i)        

(ii)        

(iii)        

(iv)        

(v) 