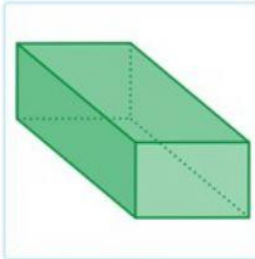
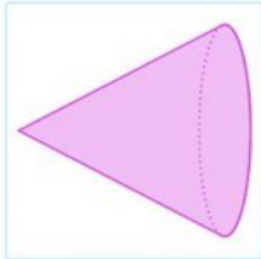




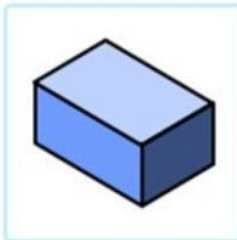
3D Shapes

Instruction: Answer the question below


1. Which shape can you a rectangle from ?



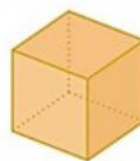
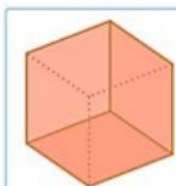
2. Which figure has less vertices?



3. How many face does this shape have?



4. Select all the cubes



5. Which shapes is three dimensional?

