

III Partial
Science Quiz

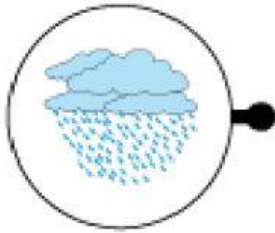
1st Grade

10%

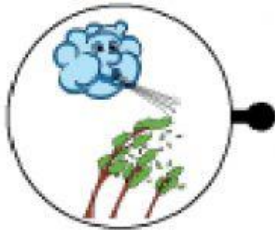
Name: _____

Date: _____

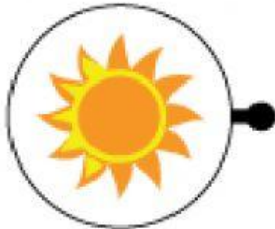
Instructions: Draw a line from each picture to the correct type of weather. **(5% total)**



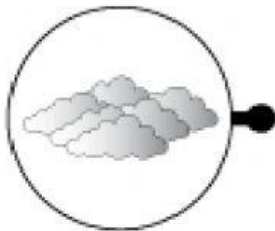
Windy



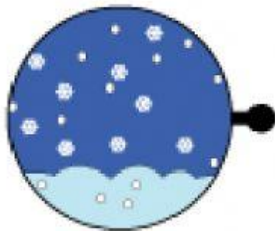
Cloudy



Rainy



Snowy



Sunny

Instructions: Write the word for the season shown. **(5% in total)**



