

POPULATION

1. Link:

Population density

The number of babies that are born for every 1000 people.

Fertility rate

The number of people living in each square kilometre of an area.

Birth rate

The average number of years that a person is expected to live.

Dead rate

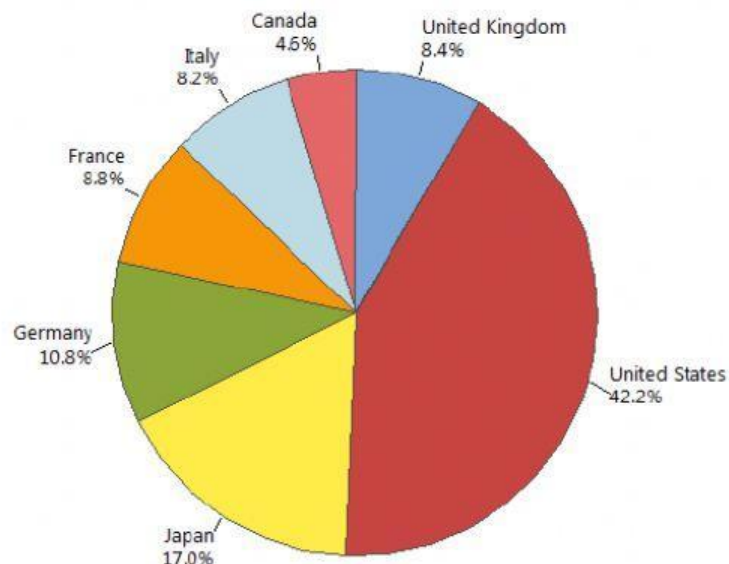
The average number of children per woman.

Life expectancy

The number of people who die for every 1000 people.

2. Look at the chart, choose the correct sentence:

This chart represents an international governments meeting. They are taking decisions about climate change. This chart shows the quantity of pollution produced by each country:



1. Which country produces more pollution?

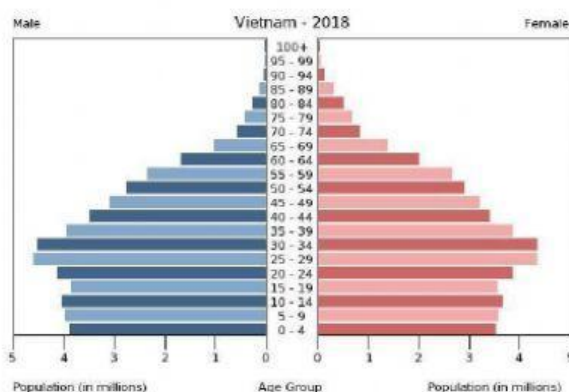
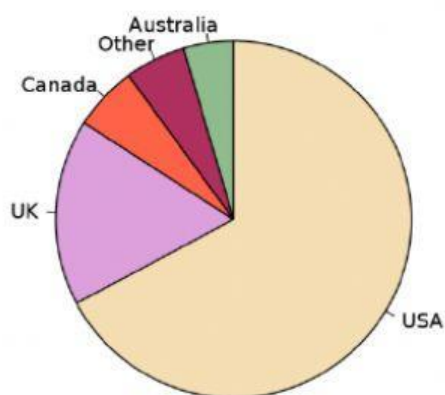
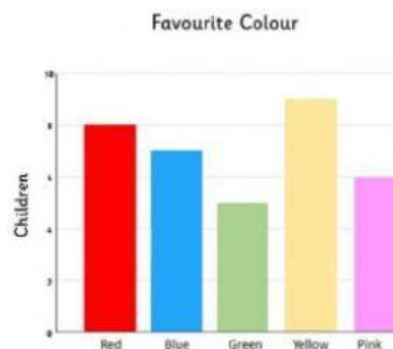
2. Which country produces less pollution?

3. What is the percentage of pollution produced by France?

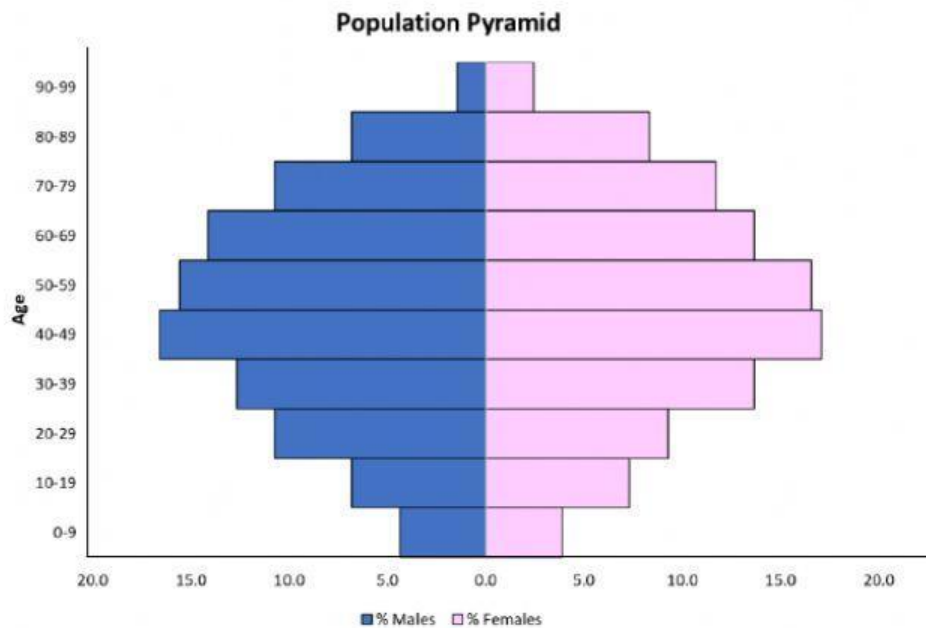
4. What is the percentage of pollution produced by Japan?

5. What is the difference in pollution between Italy and United Kingdom?

3. Write the name of each type of graph:



4. Look at the pyramid graph and choose between True or False:



The male population from 0 to 9 is less than 5%.

The female population from 40 to 49 is more than the 20%.

This population is wider at the base.

This pyramid graph represent a decrease in the population.

There is more male population between 90 – 99.

This pyramid graph shows a bigger female population.