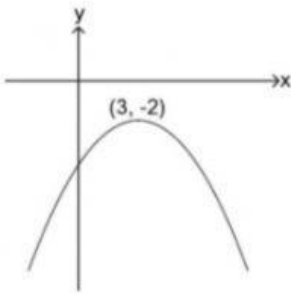
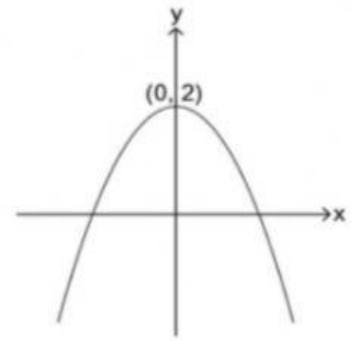
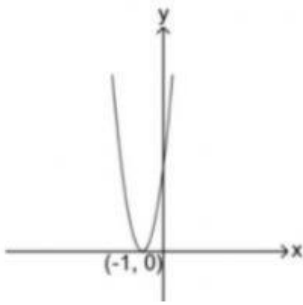


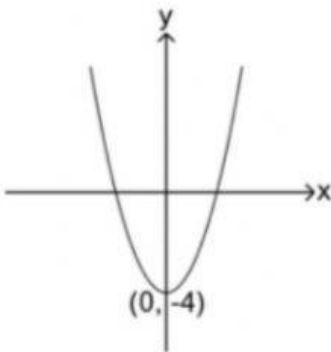
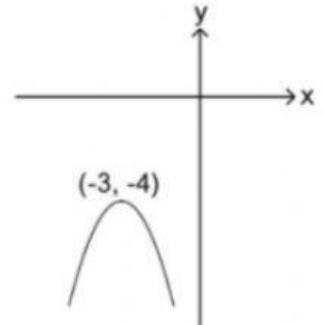
התאימו בין הפונקציה לגרף שלה:



$$y = (x + 3)^2 + 4$$

$$y = 4(x + 1)^2$$

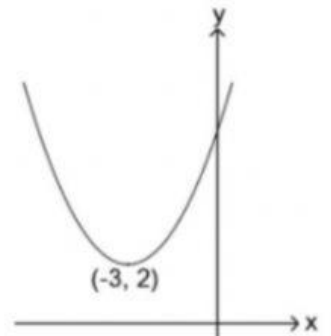
$$y = -x^2 + x - 2$$



$$y = -0.25(x - 3)^2 - 2$$

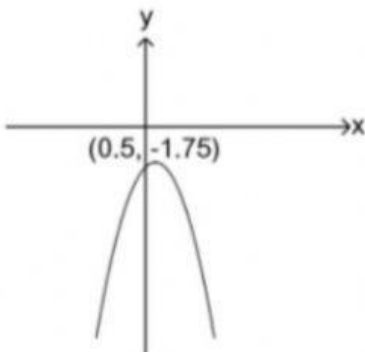
$$y = -\frac{1}{2}x^2 + 2$$

$$y = 0.5(x + 3)^2 + 2$$



$$y = -(x + 3)^2 - 4$$

$$y = x^2 - 4$$



$$y = -2x^2 + 8x - 11$$

$$f(x) = 2(x - 6)^2 - 18$$

