
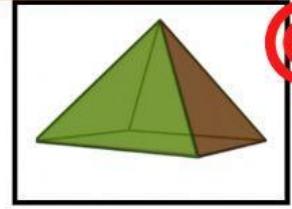



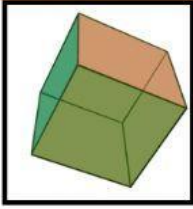


FIGURAS EN EL ESPACIO

1. COLOCA CADA FIGURA PLANA Y EN EL PLANO CON SUS RESPECTIVOS NOMBRES



Cuadrado

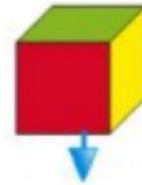
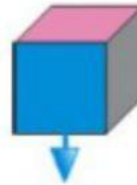
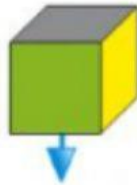
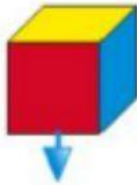
Pirámide

Triángulo

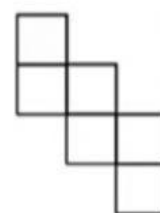
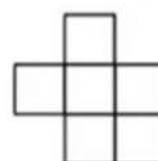
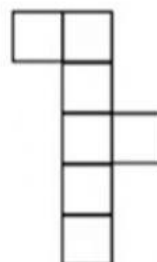
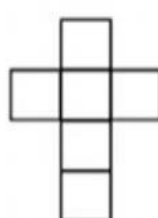
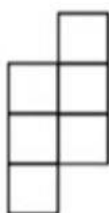
Cubo

Rectángulo

2. OBSERVA EL COLOR DE LAS CARAS Y RELACIONA EL CUBO CON SU DESARROLLO



3. SELECCIONA CUÁLES DESARROLLOS PLANOS PERMITEN CONSTRUIR EL CUBO



a.

b.

c.

d.