



Name: _____

TEACHER: A. Sánchez

SUBJECT: Science

DATE: 21/06/2022

TIME: 30 min.

QUIZ

No. 2

GENERAL INSTRUCTIONS: Read the instructions below before starting the activity.

SCORE

Grade	Section	List No.
2		

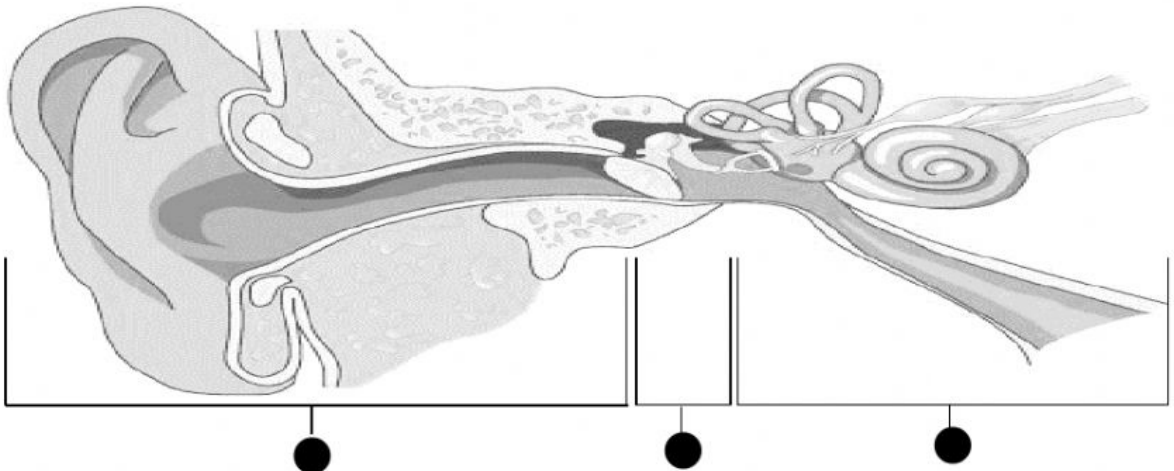
The hearing sense

1. Color the organ used for HEARING. (2 points)



2. Match the names of the 3 main sections of the ear.

(1 point each = 3 points)



**MIDDLE
EAR**






**INNER
EAR**

**OUTER
EAR**

3. Listen the sounds and tick (✓) the box yes or no. Then color the pictures. (1 point each = 5 points)

YES

NO

Sound 1			
Sound 2			
Sound 3			
Sound 4			
Sound 5			

Made by
Arturo Sánchez