



1. For first two days it snowed 2.4 centimeters each day. The next three days, it snowed 3.6 centimeters each day. How much did it snow on those five days.


2. Katy earns \$8.50 per hour at her part-time job and \$6.40 per hour at her baby-sitting job. On Saturday she worked 3.5 hours at part-time job and spent 2.5 hours babysitting. What were her total earnings for the day?

3. Janet ordered 9 pizzas and 6 burgers. Each pizza costs \$12.75 and each burger costs \$11.25. How much does she need to pay?


4. Javier bought 3 notebooks for \$0.83 apiece and two boxes of pencils for \$2.69 apiece. How much does he need to pay?

5. At the zoo the polar bears are fed 0.3 bucket of fish a day for 4 days and 0.4 bucket of meat every day for 5 days. How many buckets of fish and meat are the polar bears fed in total?


What is the area? Complete.



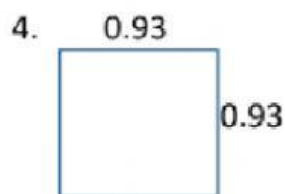
_____ Square units




_____ square units



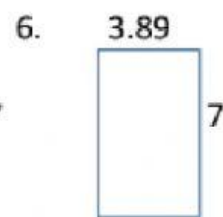
_____ square units



_____ Square Unit



_____ Square Unit



_____ Square Unit