

Name: \_\_\_\_\_

Class & Section: \_\_\_\_\_

Date: \_\_\_\_\_


## Word Problems


- 1) Mary has 6 cherries. She eats 2 of them. How many cherries are left?




$$\boxed{6} - \boxed{\phantom{00}} = \boxed{\phantom{00}}$$


- 2) There are 8 orange slices in a plate. Pam eats 3 of them. How many orange slices are there in the plate now?



$$\boxed{8} - \boxed{\phantom{00}} = \boxed{\phantom{00}}$$


- 3) Tina has 5 candies. She gave 4 of them to Rosy. How many candies are left with Tina?



$$\boxed{5} - \boxed{\phantom{00}} = \boxed{\phantom{00}}$$
