







## Science

1. Give two examples of angiosperms and two examples of gymnosperms:

ANGIOSPERMS: \_\_\_\_\_

GYMNOSPERMS: \_\_\_\_\_

2. Classify the following plants:

		
Daisies	Almond tree	Fir tree
		
Pine tree	Pear tree	Hibiscus

3. Look at the words below. Select the correct option.

- CONES
- FRUIT
- SPORES CAPSULES
- FRONDS
- SMALL FLOWERS
- RHIZOIDS
- SORI