

Nombre:

Fecha:



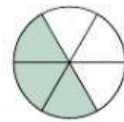
Colegio:

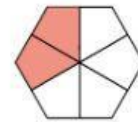
Curso:

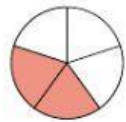
1. Expresa en forma de fracción las siguientes figuras geométricas.



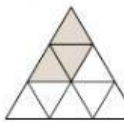
$$\frac{4}{5}$$

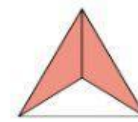

$$\frac{\quad}{\quad}$$


$$\frac{\quad}{\quad}$$


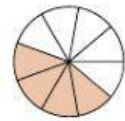
$$\frac{\quad}{\quad}$$


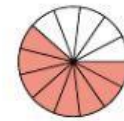
$$\frac{\quad}{\quad}$$

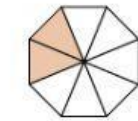

$$\frac{\quad}{\quad}$$


$$\frac{\quad}{\quad}$$


$$\frac{\quad}{\quad}$$


$$\frac{\quad}{\quad}$$


$$\frac{\quad}{\quad}$$


$$\frac{\quad}{\quad}$$


$$\frac{\quad}{\quad}$$

2. Expresa en forma de fracción las siguientes operaciones.

$$1 + \frac{1}{2} = \frac{\quad}{\quad}$$

$$4 + \frac{3}{4} = \frac{\quad}{\quad}$$

$$5 + \frac{2}{3} = \frac{\quad}{\quad}$$

$$9 + \frac{4}{5} = \frac{\quad}{\quad}$$

$$7 + \frac{1}{3} = \frac{\quad}{\quad}$$

$$4 + \frac{2}{7} = \frac{\quad}{\quad}$$