



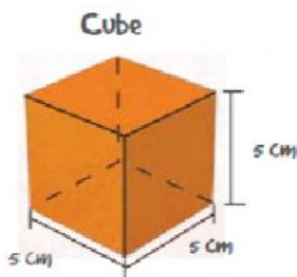
6th Grade Quarterly Evaluation Math Test

Student's name: _____ Group: _____

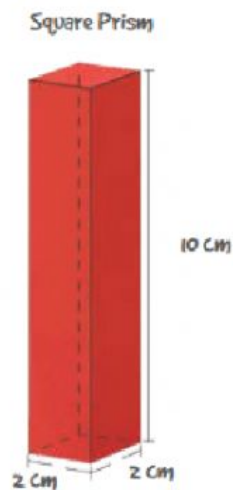
Write the operations needed to convert units of measurement. Look at the example. **From dam to cm, multiply by 1,000.**

1. From dam to cm, _____.
2. From cm to m, _____.
3. From km to m, _____.
4. From mm to hm _____.

Calculate the total area of the following prism.

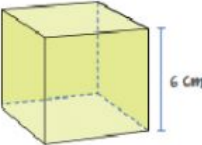


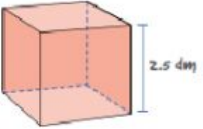
total area: _____

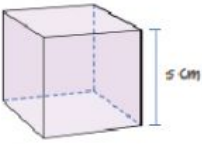


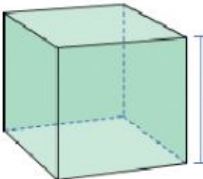
total area: _____

Calculate the volume of the cubes.

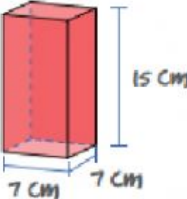
1.  $V =$

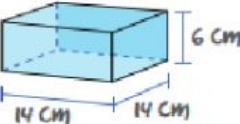
3.  $V =$

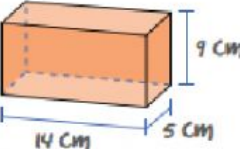
2.  $V =$

4.  $V =$

Calculate the volume of the prism.

1.  $V =$

2.  $V =$

3.  $V =$