

Самостоятелна работа

Събиране и изваждане на числата до 10

Име Іб клас

Задача 1. Пресметни

$7 + 3 = \square$

$4 + 4 = \square$

$6 - 2 = \square$

$5 + 3 = \square$

$7 - 3 = \square$

$5 + 4 = \square$

$7 - 0 = \square$

$10 - 2 = \square$

$6 - 6 = \square$

$$\begin{array}{r} 3 \\ + 2 \\ 1 \\ \hline \square \end{array}$$

$$\begin{array}{r} 2 \\ + 4 \\ 3 \\ \hline \square \end{array}$$

$$\begin{array}{r} 5 \\ + 4 \\ 1 \\ \hline \square \end{array}$$

Задача 2. Коя пчеличка на кое цвете ще кацне? Свържи

четни



нечетни



Задача 3. Напиши пропуснатите числа:

$10 = 10 + \square \quad 8 = 2 + \square \quad 3 = 4 - \square$

$2 - \square = 0 \quad 4 + \square = 9 \quad \square - 3 = 3$

Задача 4. > < =

$4 + 1 \square 7$

$8 \square 9 - 1$

$6 - 2 \square 8$

$8 - 4 \square 4$

$3 + 4 \square 6 - 3$


$10 - 5 \square 1 + 5$

Задача 5. Напиши подходящо число, така че полученото да е вярно:

$7 - \square < 5 \quad 6 - 1 < \square \quad \square + 3 = 7$

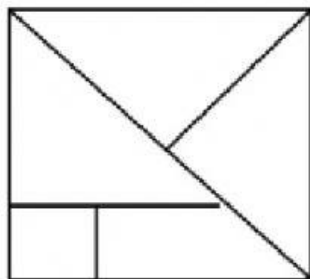
$\underline{5 + \square} > 9 \quad \square + 3 > 5 \quad 10 - \square = 4$

Задача 6.

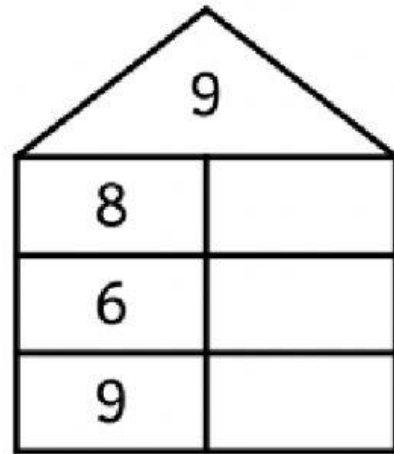
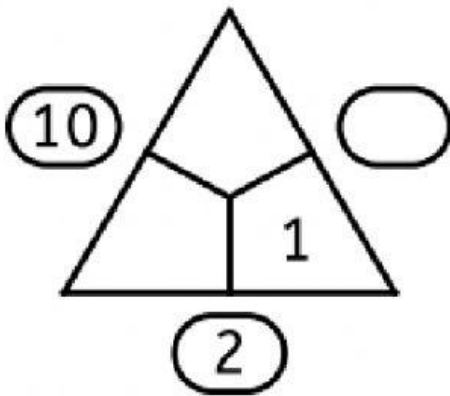
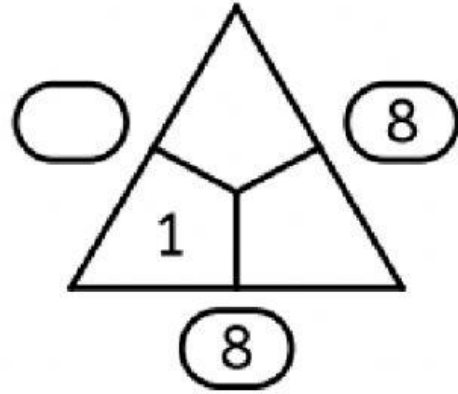
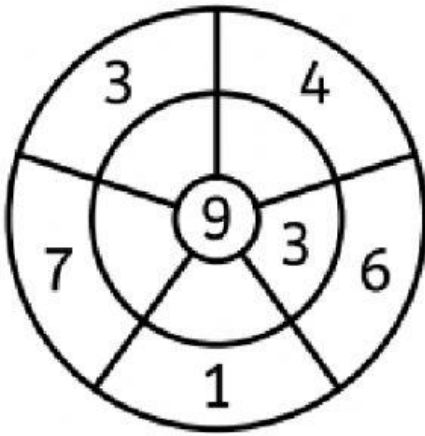


$\square + \square + \square = \square$

Задача 7. Запиши броят на фигурите:



Задача 8. Попълни празните места:

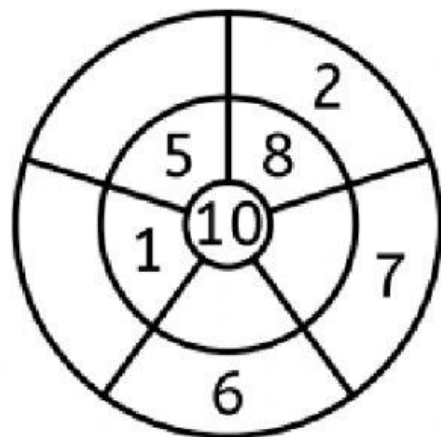


$$4 + 2 = \underline{\quad}$$

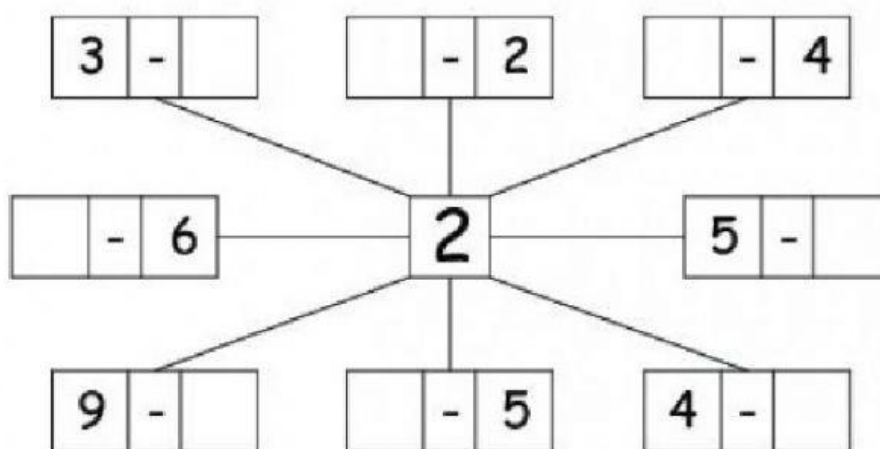
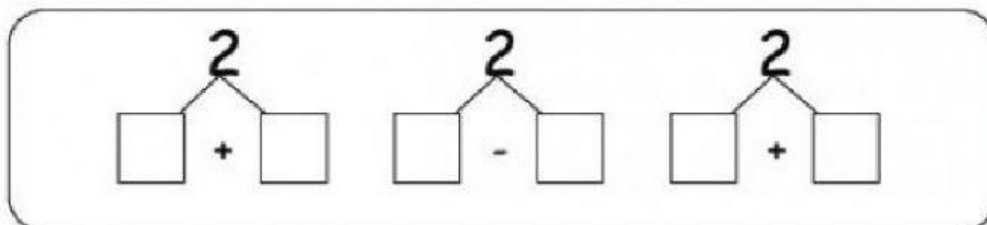
$$8 - 8 = \underline{\quad}$$

$$2 - 1 = \underline{\quad}$$

$$5 + 2 = \underline{\quad}$$



Задача 9. Напиши пропуснатите числа, така че крайният резултат да бъде 2:



Задача 10. Попълни кръстословицата:

