



Answer the questions.

## Groups of five up to 10



How many toes do you see on each foot?



How many toes are there altogether?

Write it as a sum.



$$5 + 5 =$$





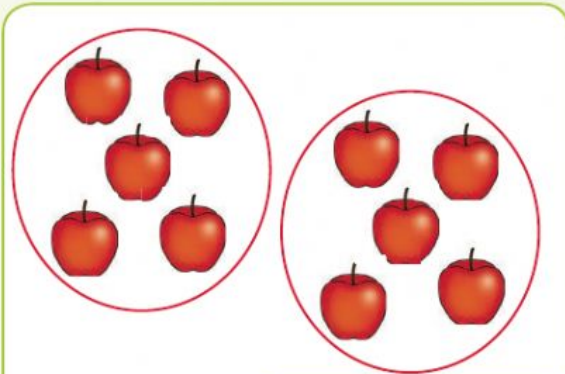
Look at the pictures and write how many groups of what?



1 2 3 4 5 6 7 8 9 10



Write a sum for the following:



Teacher: \_\_\_\_\_

Sign: \_\_\_\_\_

Date: \_\_\_\_\_

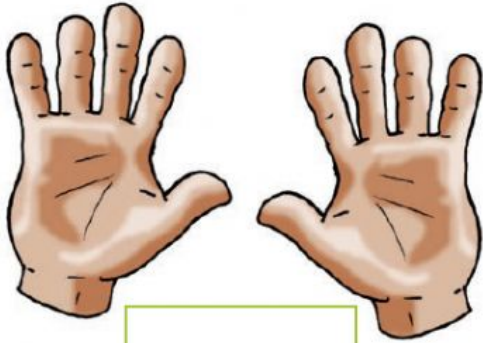






## Repeated addition of fives up to 10

How many fingers or toes are there? Write a number sentence.





Calculate.

$$\boxed{5} + \boxed{5} = \boxed{\phantom{00}}$$



Write a number sentence for the following:



How many toes do you have on each foot? How many toes do you have in total? Draw it on a paper then write a number sentence .

Sum:



How many fingers do you have on one hand? How many fingers do you have in total? Make a drawing on a paper. Write the sum below .



Teacher:  
Sign:

Date:

