

A. Answer the following time problems.

1. Zoe started playing Minecraft at 6 o'clock and finished at eleven o'clock. For how long did Zoe play?
- _____




/1

2. It started raining at 9:00 and stopped three hours later. At what time did it stop raining?
- _____



/1

3. The cake came out of the oven at the time shown on the clock. If the cake was in the oven for one hour, what was the time when it went into the oven?
- _____



/2

B. Compare the weight of the objects using: *heavier than*, *lighter than* or *equal to*.



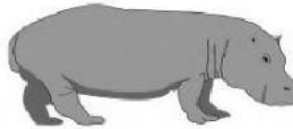
1. The ball is _____ the chicken.
2. The ship is _____ the bus.
3. The truck is _____ the sheep.



4. The flower is _____ the button.
5. The teddy is _____ the apple.
6. The duck is _____ the plane.

/6

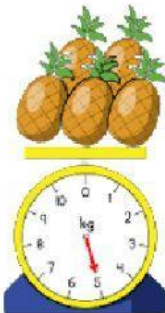
C. Arrange the items from *lightest* to *heaviest*.



--	--	--

/2


D. Write the weight shown on the scales below.



_____ kg








_____ kg



_____ kg

/5

E. Say whether the weight of the objects below should be weighed in grams (g) or kilograms (kg).

				
a car	a ladybug	acorns	a ship	a spider

/5