

**Cambridge Primary Programme**


Name: \_\_\_\_\_

Date: \_\_\_\_\_

Class: \_\_\_\_\_




## Ordinal Numbers





**1. Read and circle.**

(a) Circle the 2<sup>nd</sup> horse.




(b) Circle the 3<sup>rd</sup> bird.

1st




(c) Circle the 5<sup>th</sup> fish.

1st



(d) Circle the 4<sup>th</sup> chicken.

1st



(e) Circle the 6<sup>th</sup> elephant.

1st



2. Write the ordinal number of the coloured cake in each row of cakes.



1st



2nd



3rd




4th



5th

					3rd

4. Look, read and circle the correct answer.




(a) Where is the  in the line?

A. 6<sup>th</sup>

B. 5<sup>th</sup>

C. 4<sup>th</sup>

(b) Who is between the  and the  in the line?




(c) Where is the  in the line?

A. 1<sup>st</sup>

B. 2<sup>nd</sup>

C. 3<sup>rd</sup>

(d) Who is between the  and the  in the line?

