


Name: _____

Adding Using Picture


Count the objects, write the number of each and find the sum.



$$\underline{3} + \underline{1} = \underline{\quad}$$




$$\underline{6} + \underline{4} = \underline{\quad}$$



$$\underline{2} + \underline{4} = \underline{\quad}$$



$$\underline{2} + \underline{2} = \underline{\quad}$$



$$\underline{6} + \underline{3} = \underline{\quad}$$