



# Colegio Adolfo Ruiz Cortines

C.C.T 15PPR7061M

## Math English Exam

May-July 2022

2<sup>nd</sup> grade

Name: \_\_\_\_\_

Date: \_\_\_\_\_ List Number: \_\_\_\_\_


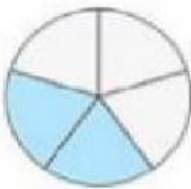

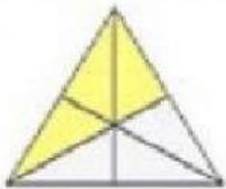
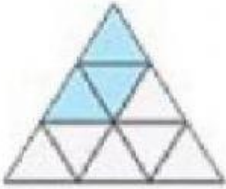
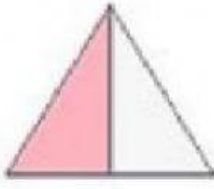
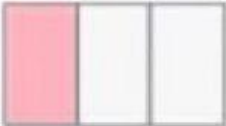
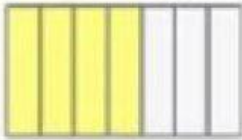


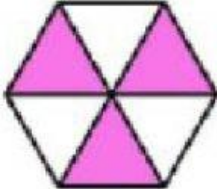
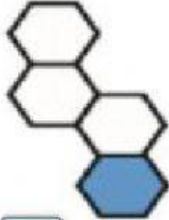
### I. Solve the problems. (6 points)

- Fernando and Karla have some coins. Fernando has 97 coins. Karla has 13 fewer than Fernando. How many coins does Karla have?

- Ximena and Josue collect stickers. Ximena has 56 stickers. She has 32 more than Josue. How many stickers does Josue have?

page. 1

2. Write the fraction for each shape.

|   |   |   |
|---|---|---|
| <br>$\frac{2}{3}$                                  | <br><input type="text"/><br><input type="text"/>   | <br><input type="text"/><br><input type="text"/>   |
| <br><input type="text"/><br><input type="text"/>   | <br><input type="text"/><br><input type="text"/>   | <br><input type="text"/><br><input type="text"/>   |
| <br><input type="text"/><br><input type="text"/> | <br><input type="text"/><br><input type="text"/> | <br><input type="text"/><br><input type="text"/> |
| <br><input type="text"/><br><input type="text"/> | <br><input type="text"/><br><input type="text"/> | <br><input type="text"/><br><input type="text"/> |

3. Match the fraction to the picture



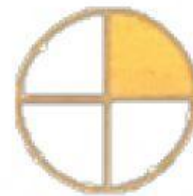
a. one third




b. one fourth



c. one half

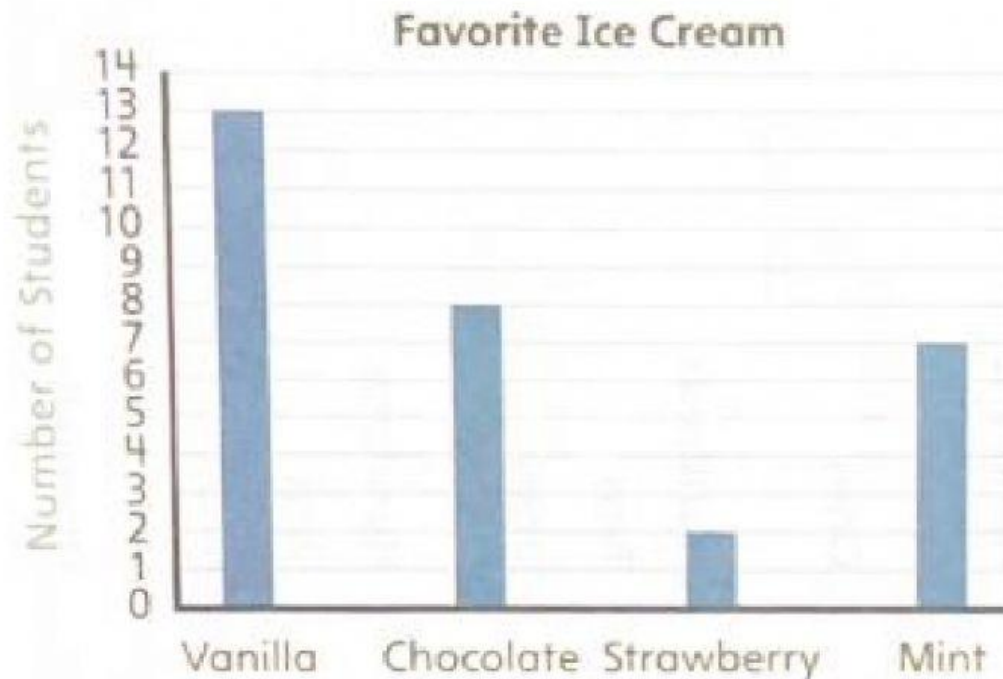


d. two thirds



e. three fourths

4. Students answered a survey question about their favorite ice cream flavor. The bar graph below shows the data.



1. How many more students like vanilla than like chocolate?

---

2. How many fewer students like strawberry than like chocolate?

---

3. How many students like chocolate and mint ice cream?

---

4. How many students answered the survey question?

---