



MATH TEST

2nd Grade – I Partial



Student's Name: _____

Teacher's Name: Ms. Martinez Score: _____ Points: 20%

School Year: 2021-2022

Topics: Place Value Through Hundreds

Add and Subtract

Greater and Less than

Tell Time

Bar graph

Teacher Comment:

Date: _____

PART I. TRUE OR FALSE.

2 pts (0.5 pt. each)

Instructions: Read the following statement and write a "T" if it's true, and "F" if it's false.

1. $7 - 0 = 0$
2. $3 - 2 = 1$
3. $6 - 0 = 6$
4. $1 - 1 = 1$

PART II. MULTIPLE CHOICE.

5 pts (1 pt. each)

Instructions: Circle the letter with the correct answer.

1. 75 ____ 24
a. < b. >
2. 30 ____ 19
a. < b. >
3. 17 ____ 5
a. < b. >

4. $52 \underline{\quad} 12$

a. < b. >





5. $99 \underline{\quad} 66$

a. < b. >

PART III. MULTIPLE CHOICE

4 pts (1 pt. each)

Instructions: Choose the time each clock shows.

 <input type="checkbox"/> 6:00 <input type="checkbox"/> 7:00 <input type="checkbox"/> 8:00 <input type="checkbox"/> 9:00	 <input type="checkbox"/> 2:00 <input type="checkbox"/> 3:00 <input type="checkbox"/> 4:00 <input type="checkbox"/> 5:00
 <input type="checkbox"/> 7:00 <input type="checkbox"/> 8:00 <input type="checkbox"/> 9:00 <input type="checkbox"/> 10:00	 <input type="checkbox"/> 7:00 <input type="checkbox"/> 8:00 <input type="checkbox"/> 9:00 <input type="checkbox"/> 10:00

PART IV. MATCHING

3 pts (1 pt. each)

Instructions: Look at the underlined number. Draw a line from the number to its correct place value.

128

tens

128

hundreds

128

ones

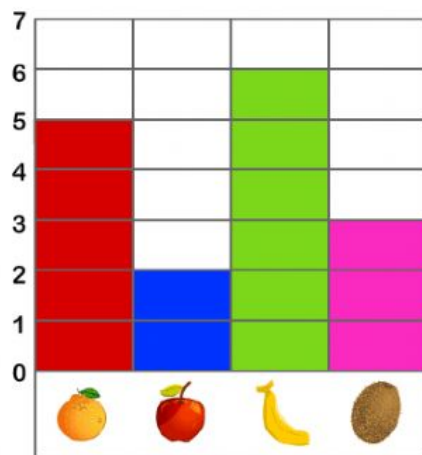
PART V. FILL-IN-THE-BLANK**4 pts (1 pt. each)**Instruction: Add.

$$\begin{array}{r} 8 \\ + 0 \\ \hline \square \end{array}$$

$$\begin{array}{r} 4 \\ + 6 \\ \hline \square \end{array}$$

$$\begin{array}{r} 5 \\ + 5 \\ \hline \square \end{array}$$

$$\begin{array}{r} 2 \\ + 3 \\ \hline \square \end{array}$$

PART VI. PROBLEM SOLVING**2 pts (0.5 pt. each)**Instructions: Use the bar graph to answer the questions.*Favorite Fruit*

1. How many people like oranges? _____
2. How many people like coconut? _____
3. Which fruit do most people like? _____
4. Which fruit do people like the least? _____

*Be Still and Know That I Am God.**Psalms 46 v 10***Mrs. Jennifer Martinez**