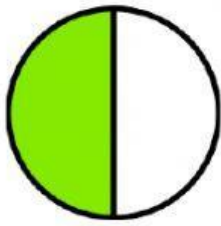
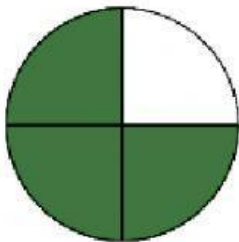


Medios, cuartos y octavos

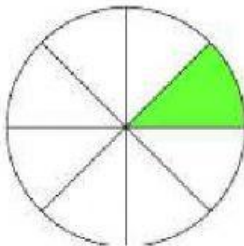
Instrucciones: Une la fracción con la figura que le corresponde.



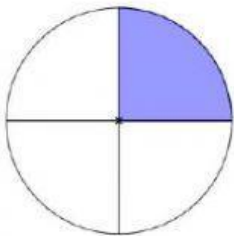
$$\frac{3}{8}$$



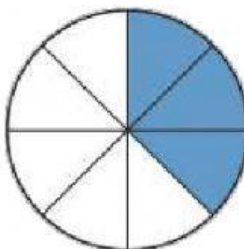
$$\frac{1}{4}$$



$$\frac{3}{4}$$



$$\frac{1}{2}$$



$$\frac{1}{8}$$