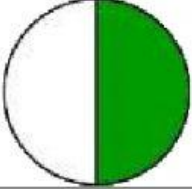
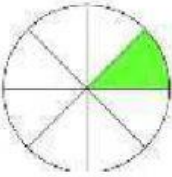
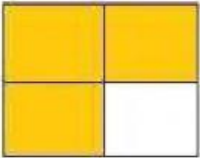
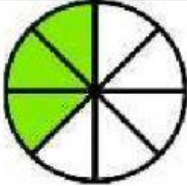
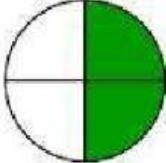
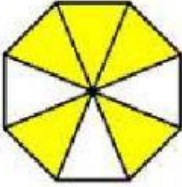


¿Qué fracción esta coloreada?

Medios, cuartos y octavos

Instrucciones: Selecciona la respuesta correcta de cada fracción.

	$\frac{1}{8}$	$\frac{1}{2}$	$\frac{1}{4}$
	$\frac{1}{8}$	$\frac{1}{4}$	$\frac{1}{2}$
	$\frac{1}{4}$	$\frac{4}{3}$	$\frac{3}{4}$
	$\frac{3}{8}$	$\frac{3}{4}$	$\frac{1}{8}$
	$\frac{1}{2}$	$\frac{2}{8}$	$\frac{2}{4}$
	$\frac{3}{5}$	$\frac{5}{8}$	$\frac{3}{4}$