

Maths: Unit 1 Revision

1. Decide which number is GREATER THAN >, LESS THAN < or EQUAL = :



20 ___ 25 78 ___ 87
65 ___ 56 84 ___ 84
44 ___ 64 13 ___ 31

2. NUMBER PATTERNS: Write the next six patterns:



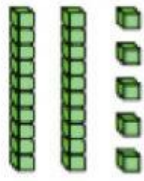

12, 14, 16, _____, _____, _____, _____, _____
10, 20, 30, _____, _____, _____, _____, _____
45, 50, 55, _____, _____, _____, _____, _____
6, 16, 26, _____, _____, _____, _____, _____
95, 85, 75, _____, _____, _____, _____, _____





3. Read the instructions. Write the next FIVE PATTERNS:

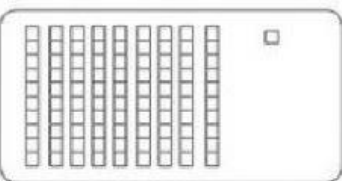

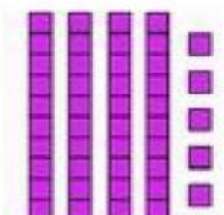
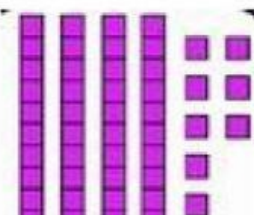
- Start at 40 and count in tens 40, 50, 60, _____, _____, _____
- Start at 25 and count in fours. _____
- Start 30 and count back in twos. _____
- Start at 35 and count back in fives. _____
- Start at 3 and count the odd numbers. _____
- Start at 4 and count the even numbers. _____

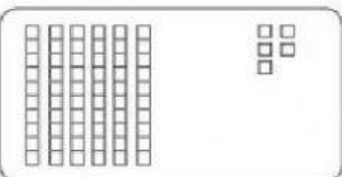



4. Tens and Units:



1)    

2)    




3)    




4)    




5. Rounding to the nearest ten:

$31 = \underline{30}$ $56 = \underline{\quad}$ $64 = \underline{\quad}$
 $17 = \underline{\quad}$ $22 = \underline{\quad}$ $89 = \underline{\quad}$
 $95 = \underline{\quad}$ $73 = \underline{\quad}$ $46 = \underline{\quad}$
 $29 = \underline{\quad}$ $12 = \underline{\quad}$ $38 = \underline{\quad}$
 $67 = \underline{\quad}$ $83 = \underline{\quad}$ $99 = \underline{\quad}$
 $43 = \underline{\quad}$ $38 = \underline{\quad}$ $55 = \underline{\quad}$

6. Doubles: Count and write:

 +  = 
 + =

 +  = 
 + =

 +  = 
 + =



7. BEFORE AND AFTER: Solve the word problems:

- Write a number GREATER THAN 48 and LESS THAN 50: _____
- Which number comes before 98?

- Which number comes after 90?

- What number is between 59 and 61? _____
- Write a number that is between 75 and 77.

