


Name: \_\_\_\_\_ Date: \_\_\_\_\_

## PERIMETER & AREA OF SHAPES

Find the area and perimeter of each of the shapes below.

10 cm




4 cm

Area = \_\_\_\_\_ cm<sup>2</sup>

Perimeter = \_\_\_\_\_ cm

8 cm




6 cm

Area = \_\_\_\_\_ cm<sup>2</sup>

Perimeter = \_\_\_\_\_ cm

5 cm




5 cm

Area = \_\_\_\_\_ cm<sup>2</sup>

Perimeter = \_\_\_\_\_ cm

10 cm




10 cm

Area = \_\_\_\_\_ cm<sup>2</sup>

Perimeter = \_\_\_\_\_ cm

7 cm




3 cm

Area = \_\_\_\_\_ cm<sup>2</sup>

Perimeter = \_\_\_\_\_ cm

5 cm



1 cm

Area = \_\_\_\_\_ cm<sup>2</sup>

Perimeter = \_\_\_\_\_ cm