

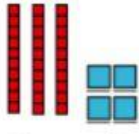
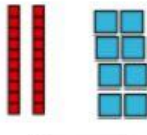


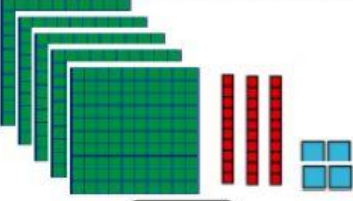
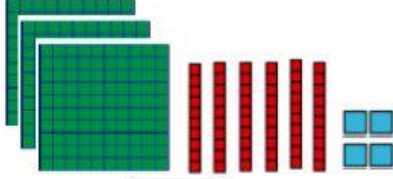




**6.- Cuenta las Unidades, decenas y centena, escribe el número que corresponda y luego compara y escribe los signos  $>$  ,  $<$  ó  $=$  (10 pts)**

Mayor, menor ó igual

|  |   |   |
|--|---|---|
| <br><input style="width: 50px; height: 20px;" type="text"/> | <input style="width: 80px; height: 40px;" type="text"/> | <br><input style="width: 50px; height: 20px;" type="text"/> |
|--|---|---|

|  |   |   |
|--|---|---|
| <br><input style="width: 50px; height: 20px;" type="text"/> | <input style="width: 80px; height: 40px;" type="text"/> | <br><input style="width: 50px; height: 20px;" type="text"/> |
|--|---|---|

|  |   |   |
|--|---|---|
| <br><input style="width: 50px; height: 20px;" type="text"/> | <input style="width: 80px; height: 40px;" type="text"/> | <br><input style="width: 50px; height: 20px;" type="text"/> |
|--|---|---|

|  |   |   |
|--|---|---|
| <br><input style="width: 50px; height: 20px;" type="text"/> | <input style="width: 80px; height: 40px;" type="text"/> | <br><input style="width: 50px; height: 20px;" type="text"/> |
|--|---|---|