







Republic of the Philippines  
Department of Education  
Region IX, Zamboanga Peninsula  
**TAGPANGI ELEMENTARY SCHOOL**  
Vitali District  
Zamboanga City



Name: \_\_\_\_\_ Grade: \_\_\_\_\_

### Subtraction Sentence

Circle the subtraction sentence that matches with the picture shown.

	$5 - 3 = 2$	$3 - 2 = 1$
	$5 - 3 = 2$	$8 - 3 = 5$
	$6 - 4 = 2$	$6 - 3 = 3$
	$9 - 5 = 4$	$5 - 1 = 4$