

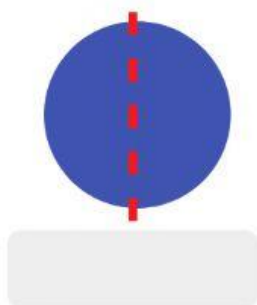
Name: _____

Date: _____

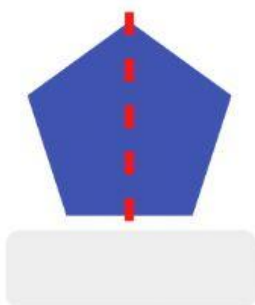
Symmetry

Is the dashed line a line of symmetry?


1.




2.



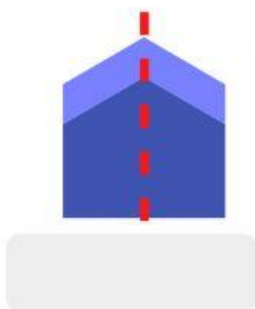
3.



4.



5.



6.



How many lines of symmetry does each letter below have?

7.



8.



9.

