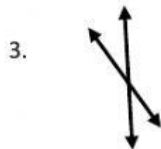
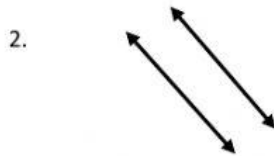
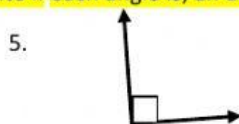


Math Quiz

Write if it is a; intersecting line, parallel lines, a line segment, a line, a point.



Write if each angle is; an acute angle, obtuse angle, or right angle.



Write if the following shape is polygon or not polygon.

