

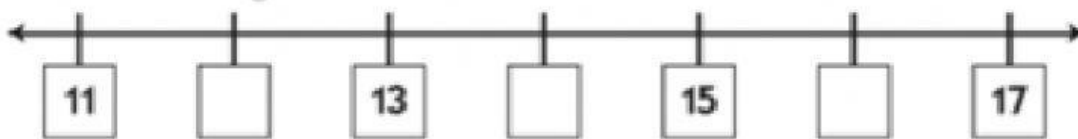
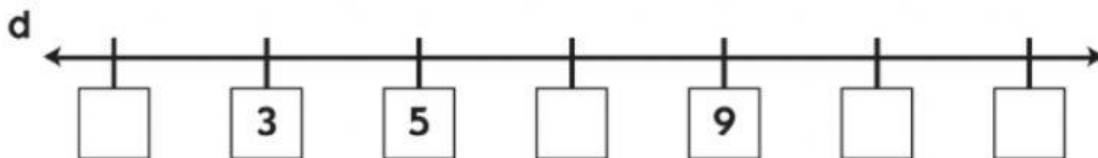
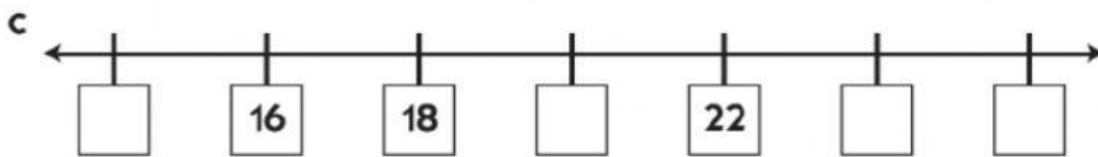
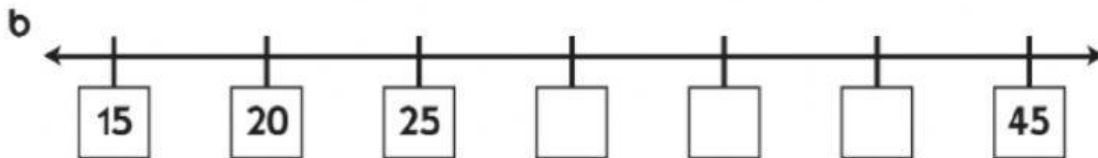
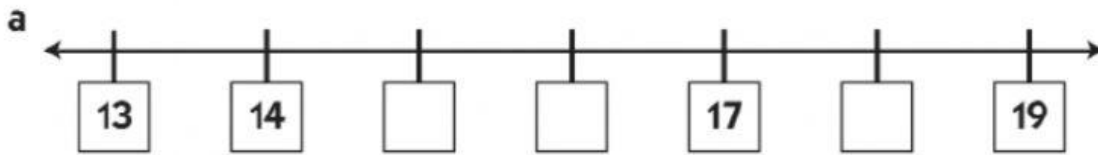


Recap of numbers 1 to 100

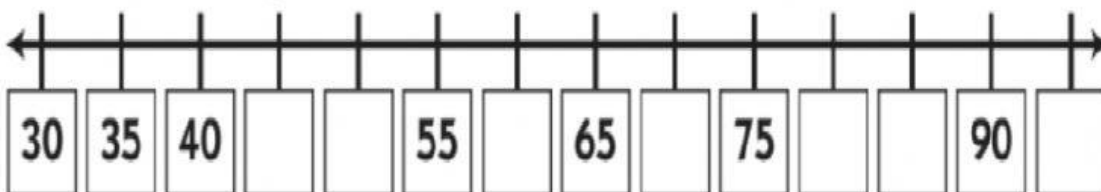
Grade 2

Q1-

Fill in the missing numbers on each number line below.



e



f




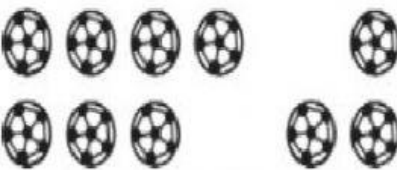
2 The numbers in the box are mixed up! Put them in order from least to greatest.

62 51 17 78 40 14

_____ , _____ , _____ , _____ , _____ , _____
 least greatest

Q3-

Fill in the missing numbers to solve these equations. Use the pictures to help.

<p>a _____ = 5 + 5</p> 	<p>b 10 = 2 + 4 + _____</p> 
<p>c 10 = _____ + 2</p> 	<p>d 7 + _____ = 10</p> 

Q4-

15	14	13	10	14	14	19
- 2	- 6	- 3	- 2	- 7	- 8	- 9
_____	_____	_____	_____	_____	_____	_____