

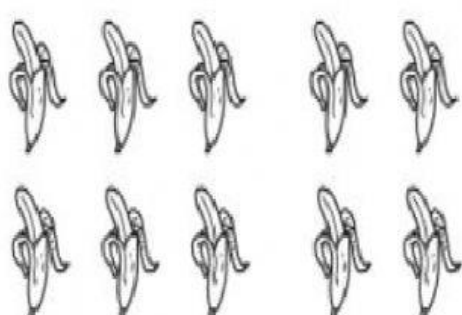
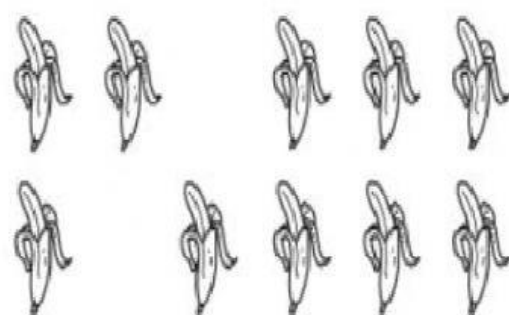




Recap of number up to 120

Grade 2

Q1

Fill in the missing numbers to solve these equations. Use the pictures to help.

<p>e $10 - \underline{\quad} = 4$</p> 	<p>f $10 - \underline{\quad} = 7$</p> 
<p>g $4 + 5 = \underline{\quad} + 7$</p> 	<p>h $10 - 5 = 2 + \underline{\quad}$</p> 

Q2

15	17	17	11	16	18	19
- 5	- 8	- 10	- 2	- 8	- 8	- 2
_____	_____	_____	_____	_____	_____	_____

Q3

Fill in the missing numbers on this chart.

1	2		4	5	6	7	8	9	10
11	12	13		15	16		18	19	20
21		23	24	25		27	28	29	30
	32	33	34	35	36	37	38		40
41	42		44	45	46	47		49	
51		53	54		56	57	58	59	60
	62	63	64	65		67	68		70
71	72		74	75	76		78	79	
81	82	83		85	86	87		89	90
91		93	94		96	97	98	99	100