

Name: _____

Date: _____

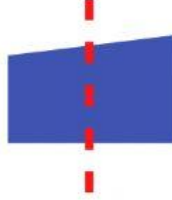
Symmetry

Is the dashed line a line of symmetry?

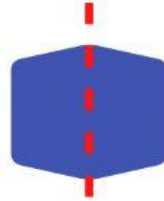
1.



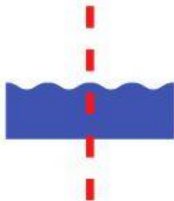
2.



3.



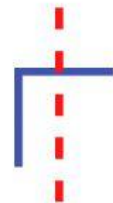
4.



5.



6.



7.



8.



9.



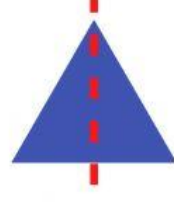
10.



11.



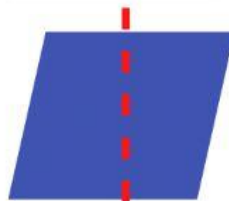
12.



13.



14.



15.

