














 40c	 50c	 R2	 75c
 30c	 20c	 35c	 10c
 13c	 30c	 25c	 90c
 3c	 5c	 15c	 17c

1. Rebecca went to the shop and bought an apple and cheese. How much did she spend altogether?

2. Fakile went to the shop and bought some tomatoes and a cupcake. How much did she spend all altogether?

3. Ridwan went to the shop and bought a samosa and some eggs. How much did she spend all altogether?

4. Marius went to the shop and bought a cucumber, an apple and some milk. He had R1 to spend. Did he have enough money? How do you know?

5. Jake went to the shop and bought some bacon and 2 cupcakes. How much did he spend altogether? He paid R1 to the shopkeeper. How much change did he get?