





Tally Chart

We can collect *data* by taking a *survey*. A *tally chart* shows data using *tally marks*.

The following tally chart shows the favourite shapes of a group of students. Complete the chart below and answer the questions.

My Favourite 3D Shape		
Shapes	Tally	Number of Students
		
		
		
		

1. How many students like cube?

2. How many more students like cone than cylinder?

3. How many more students like cube than cuboid?

4. Which shape is the most popular?

5. Which shape is the least popular?

6. How many students were asked about their favourite shapes?